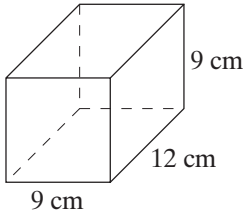


# Practice 12-2

## Surface Areas of Prisms and Cylinders

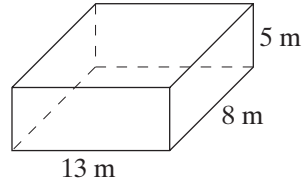
Find the surface area of each prism.

1.



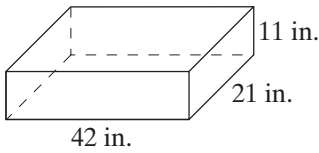
\_\_\_\_\_

2.



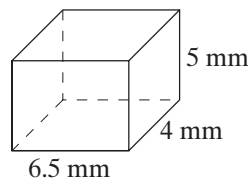
\_\_\_\_\_

3.



\_\_\_\_\_

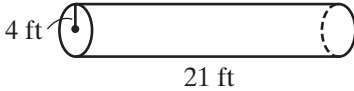
4.



\_\_\_\_\_

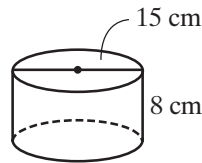
Find the surface area of each cylinder. Round to the nearest whole number.

5.



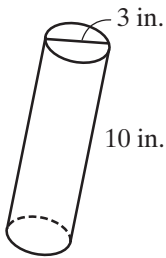
\_\_\_\_\_

6.



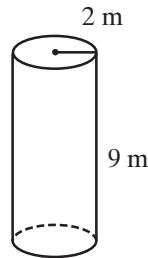
\_\_\_\_\_

7.



\_\_\_\_\_

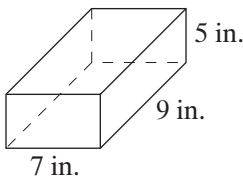
8.



\_\_\_\_\_

Draw a net for each three-dimensional figure.

9.



10.

