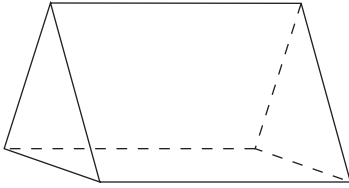


# Practice 12-1

## Three-Dimensional Figures

Describe the base and name the figure.


1.



\_\_\_\_\_

\_\_\_\_\_

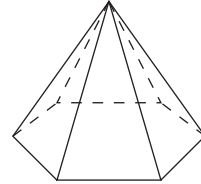
2.



\_\_\_\_\_

\_\_\_\_\_

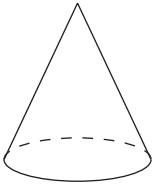
3.



\_\_\_\_\_

\_\_\_\_\_

4.

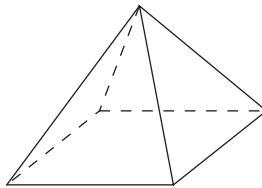


\_\_\_\_\_

\_\_\_\_\_

\_\_\_\_\_

5.

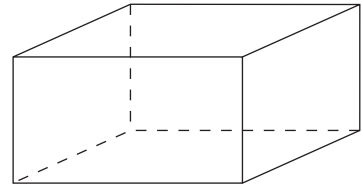


\_\_\_\_\_

\_\_\_\_\_

\_\_\_\_\_

6.




\_\_\_\_\_

\_\_\_\_\_

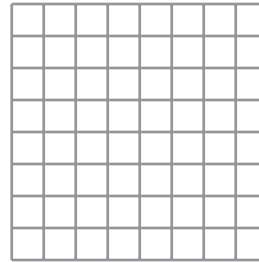
\_\_\_\_\_

Draw each figure named.


7. a triangular pyramid



8. a square prism



9. a cone



10. a pentagonal pyramid

