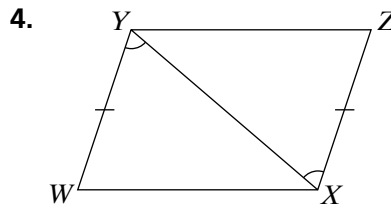
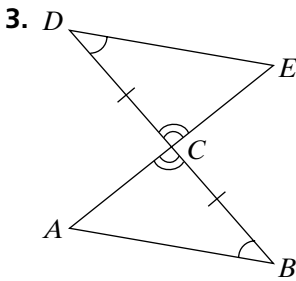
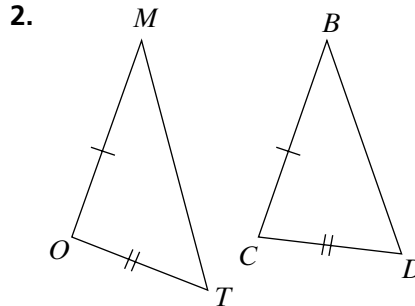
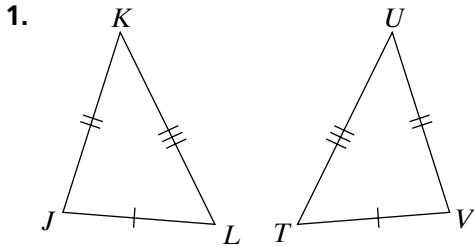


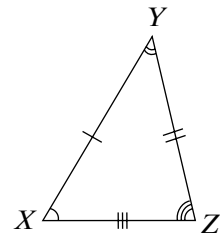
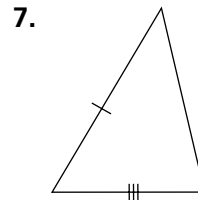
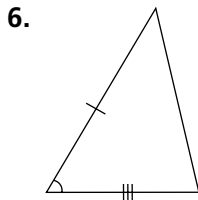
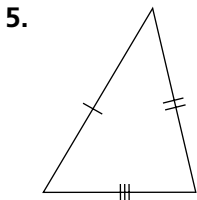
Practice 11-2

Congruent Figures

Determine whether each pair of triangles is congruent. Explain.



Determine if each triangle in Exercises 5–7 must be congruent to $\triangle XYZ$ at the right.



For Exercises 8–9, use the triangles at the right.

8. $\triangle XYZ \cong$ _____ by _____

9. Find the missing measures for $\triangle XYZ$.

